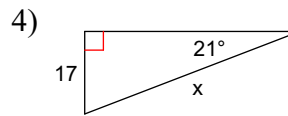
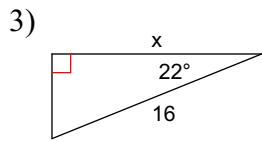
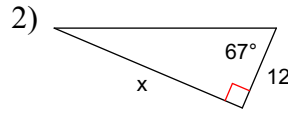
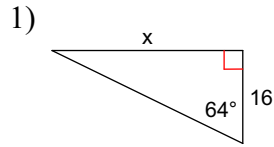
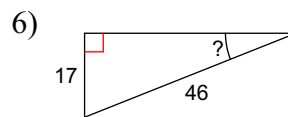
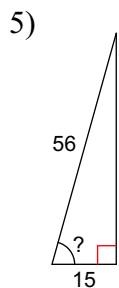


HW 4.4

Find the missing side. Round to the nearest hundredth. SHOW ALL WORK.



Find the measure of the indicated angle to the nearest hundredth. SHOW ALL WORK.



Find the missing side of each triangle. Round your answers to the nearest hundredth if necessary. SHOW ALL WORK.

