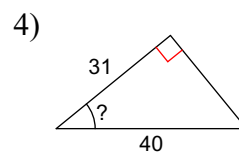
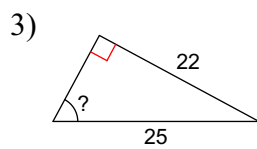
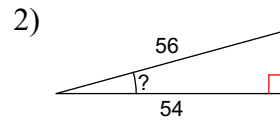
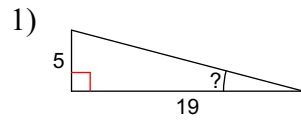


HW 4.3

Find the measure of the indicated angle to the nearest degree or hundredth of a degree.



Find the missing side of each triangle. Round your answers to the nearest tenth if necessary.

