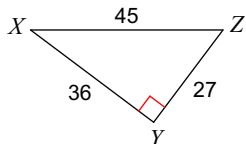


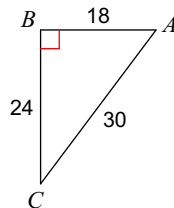
HW 4.2

Find the value of each trigonometric ratio. Write it as a fraction or decimal.

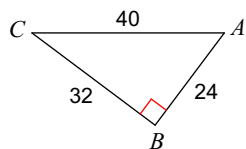
1) $\sin X$



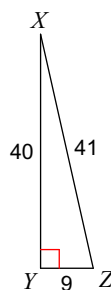
2) $\tan C$



3) $\cos A$



4) $\sin Z$



Solve for x .

