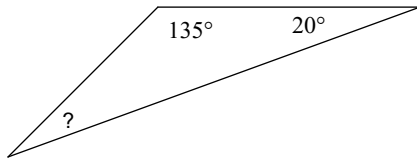


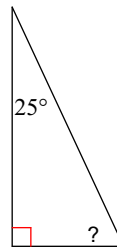
HW 4.1 Due

Find the measure of the angle indicated.

1)

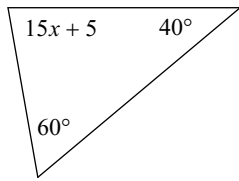


2)

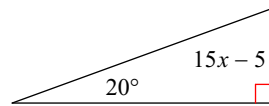


Solve for  $x$ .

3)

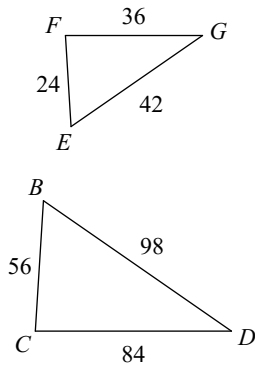


4)



State if the triangles in each pair are similar. If so, state how you know they are similar.

5)



6)

