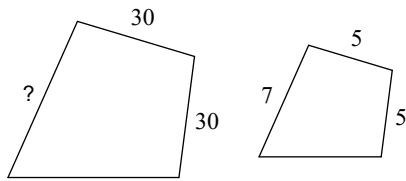


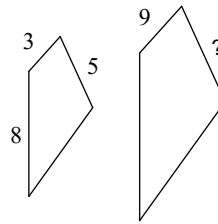
HW 3.2

The polygons in each pair are similar. Find the missing side length.

1)

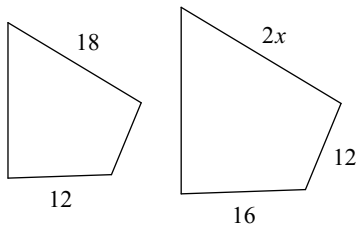


2)



Solve for x . The polygons in each pair are similar.

3)



4)

