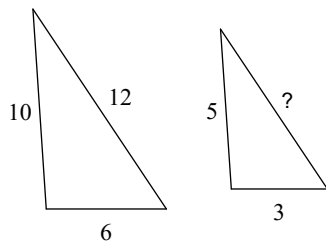


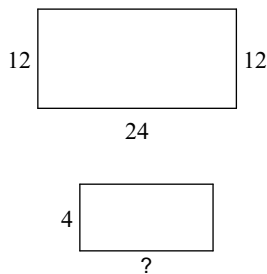
HW 3.1

The polygons in each pair are similar. Find the missing side length.

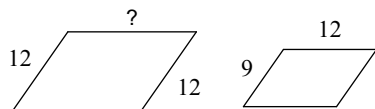
1)



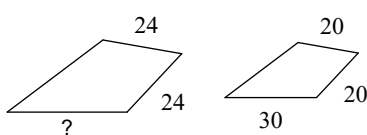
2)



3)

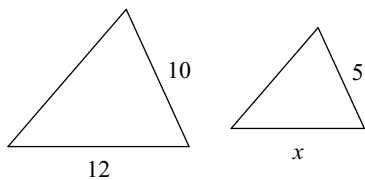


4)

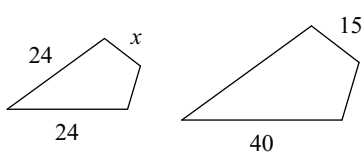


Solve for x . The polygons in each pair are similar.

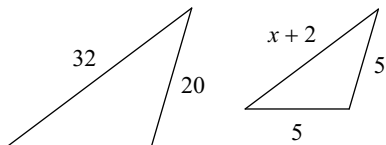
5)



6)



7)



8)

