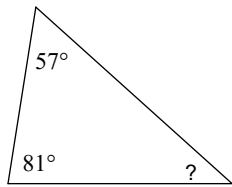


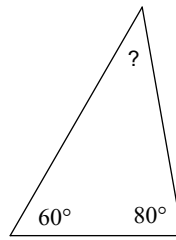
HW 2.4

Find the measure of each angle indicated.

1)

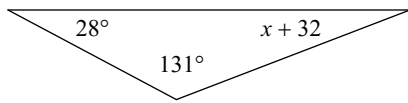


2)

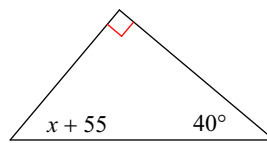


Solve for x .

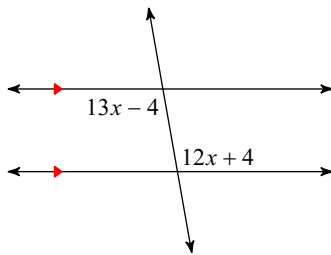
3)



4)



5)



6)

