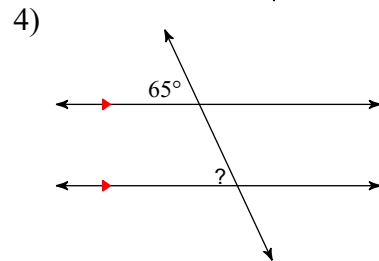
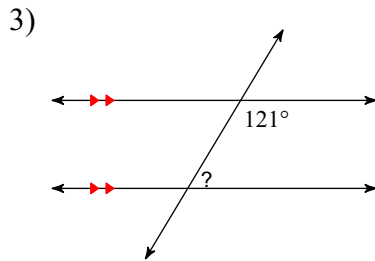
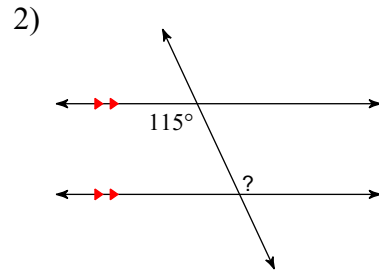
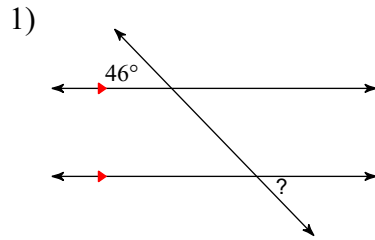


HW 2.3

Identify each pair of angles as vertical, corresponding, alternate interior, alternate exterior, or same-side interior. State if the angles are congruent or supplementary. Find the measure of the angle indicated.



Identify each pair of angles as vertical, corresponding, alternate interior, alternate exterior, or same-side interior. State if the angles are congruent or supplementary. Find the measure of the angle indicated in bold.

