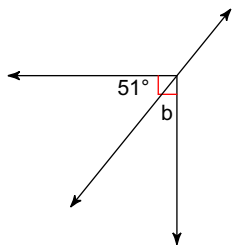


HW 2.1

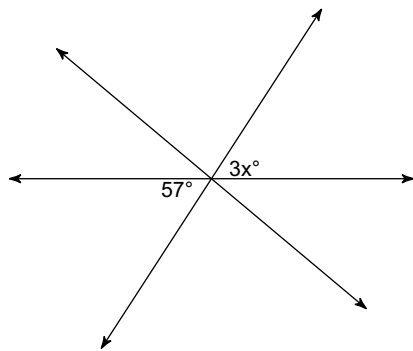
Find the measure of angle b.

1)



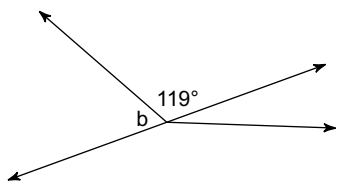
Find the value of x.

2)



Find the measure of angle b.

3)



4)

