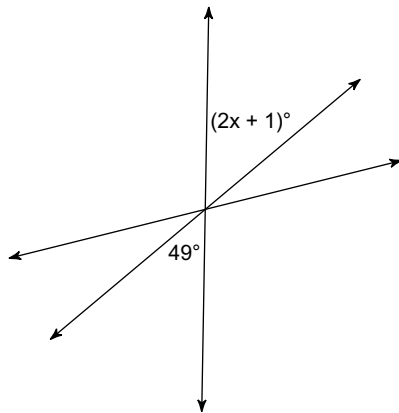


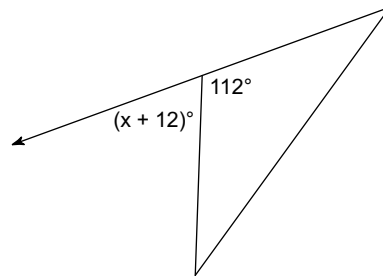
HW2.2

Find the value of x.

1)

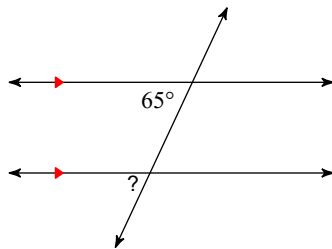


2)



Find the measure of each angle indicated.

3)



Solve for X. Use this value to find the measure of the angle indicated in bold.

4)

