

G4: B Level Test Review

Find the length of the side labeled x. Round your answer to the nearest hundredth.

1)  $\sin 37 = \frac{5.13}{x}$   
 $x = \frac{5.13}{\sin 37}$   
 $x \approx 8.52$   
 $\tan 65 = \frac{11}{y}$   
 $11 = y \cdot \tan 65$   
 $y = \frac{11}{\tan 65}$   
 $y \approx 5.13$

2)  $\tan 20 = \frac{31}{y}$   
 $y = \frac{31}{\tan 20}$   
 $y \approx 101.66$   
 $\tan 29 = \frac{101.66}{x}$   
 $x = \frac{101.66}{\tan 29}$   
 $x \approx 183.39$

Find the area and perimeter of the triangle. Round your answers to the nearest hundredth.

3)  $\sin 34 = \frac{x}{34}$   
 $x = 34 \cdot \sin 34$   
 $x \approx 19.01$

$\cos 34 = \frac{y}{34}$   
 $y = 34 \cdot \cos 34$   
 $y \approx 28.19$   
 $\tan 25 = \frac{z}{19.01}$   
 $z = 19.01 \cdot \tan 25$   
 $z \approx 8.86$   
 $\cos 25 = \frac{w}{19.01}$   
 $w = \frac{19.01}{\cos 25}$   
 $w \approx 20.98$

$A = \frac{x(y+z)}{2} = \frac{19.01(28.19+8.86)}{2}$   
 $A = 352.11 \text{ un}^2$

$P = 34 + w + y + z$   
 $P = 34 + 20.98 + 28.19 + 8.86 = 92.03 \text{ un} = P$

Find the area and perimeter of each.

4)  $P = 2.9 + y + x + 2.9 + x + y$   
 $P = 21.44 \text{ un}$   
 $\tan 75 = \frac{6}{x}$   
 $x = \frac{6}{\tan 75}$   
 $x \approx 1.61$   
 $\sin 75 = \frac{6}{y}$   
 $y = \frac{6}{\sin 75}$   
 $y \approx 6.21$

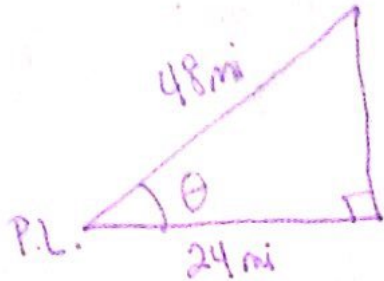
5)  $\tan 50 = \frac{6.4}{x}$   
 $x = \frac{6.4}{\tan 50}$   
 $x \approx 5.37$   
 $\sin 50 = \frac{6.4}{y}$   
 $y = \frac{6.4}{\sin 50}$   
 $y \approx 8.35$   
 $\tan 64.67 = \frac{6.4}{w}$   
 $w = \frac{6.4}{\tan 64.67}$   
 $w \approx 3.03$   
 $\sin 64.67 = \frac{6.4}{z}$   
 $z = \frac{6.4}{\sin 64.67}$   
 $z \approx 7.08$

$A = \frac{(2.9 + (2.9 + x + x)) \cdot 6}{2}$   
 $A = \frac{(2.9 + 6.12) \cdot 6}{2}$   
 $A = 27.06 \text{ un}^2$

$b_1 = 3.1$   
 $b_2 = x + 3.1 + w = 11.5$   
 $h = 6.4$   
 $A = \frac{(3.1 + 11.5) \cdot 6.4}{2}$   
 $A = 46.72 \text{ un}^2$   
 $P = 3.1 + y + x + 3.1 + w + z$   
 $P = 30.03 \text{ un}$

Draw a diagram and then solve the problem.

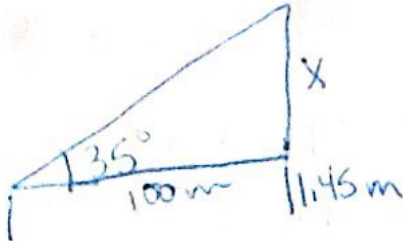
- 6) A ship travels east from Port Lincoln 24 miles before turning north. When the ship becomes disabled and radios for help, the rescue boat needs to know the fastest route to the ship. The rescue boat navigator finds that the shortest route from Port Lincoln is 48 miles long. At what angle off of due east should the rescue boat travel to take the shortest route to the ship?



$$\theta = \cos^{-1}\left(\frac{24}{48}\right)$$

$$\theta = 60^\circ$$

- 7) A surveyor is standing 100 meters from a bridge. She determines that the angle of elevation to the top of the bridge is  $35^\circ$ . The surveyor's eye level is 1.45 meters above the ground. Find the height of the bridge..



$$\tan 35 = \frac{x}{100}$$

$$x = 100 \cdot \tan 35$$

$$x = 70.02 \text{ m}$$

$$\text{Height} = 70.02 \text{ m} + 1.45 \text{ m}$$

$$\boxed{= 71.47 \text{ m}}$$

- 8) Danica is in the observation area of the Sears Tower in Chicago overlooking Lake Michigan. She sights two sailboats going due east from the tower. The angles of depression to the two boats are 42 degrees and 29 degrees. If the observation deck is 1,353 feet high, how far apart are the boats?

$$\tan 29^\circ = \frac{x}{1353}$$

$$x = 1353 \cdot \tan 29$$

$$x \approx 749.98 \text{ ft}$$

$$\tan 42 = \frac{y}{1353}$$


$$y = 1353 \cdot \tan 42$$

$$y = 1218.25 \text{ ft}$$

$$\text{distance between boats} = 1218.25 - 749.98$$

$$\boxed{= 468.27 \text{ ft}}$$

- 9) An airplane rises vertically 1000 feet over a horizontal distance of 1 mile. What is the angle of elevation of the airplane's path? (hint: there are 5,280 feet in a mile)



$$\theta = \tan^{-1}\left(\frac{5280}{1000}\right)$$

$$\boxed{\theta \approx 79.28^\circ}$$